



# GIMNASIO LOS PIRINEOS

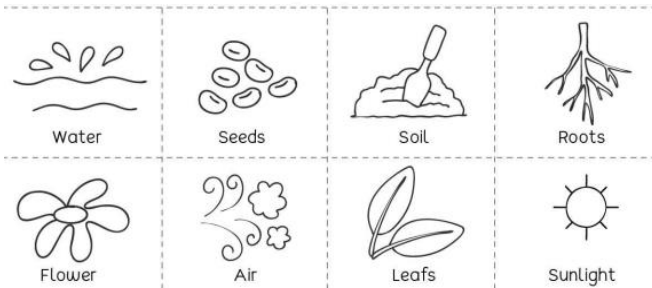
“EDUCACIÓN Y FORMACIÓN INTEGRAL CON ENFASIS EN VALORES, INGLÉS, EMPRENDIMIENTO Y GESTIÓN LABORAL”.

## TALLER EVALUATIVO SCIENCE FIRST GRADE






ESTUDIANTE: \_\_\_\_\_ FECHA: \_\_\_\_\_

1. Draw and write the parts of the plants.
2. Put the words in the correct box


Plant Needs	Plant Parts



3. Match with colors

	Flower
	Stem
	Roots
	Seed
	Leaves

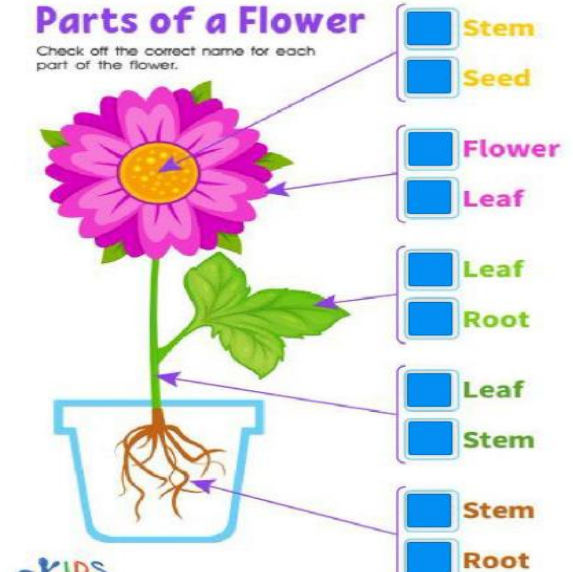
4. Plants need four things hidden in the puzzle below. Find and circle them



a l e a i h d j s e g g  
 x o g i o h c s o l m v  
 d v b r s u n l i g h t  
 g e o h c x y s l v i l  
 q w a t e r l m i l k g

5. Write and draw the needs of the plants

6. **Parts of a Flower**  
 Check off the correct name for each part of the flower.



- Stem
- Seed
- Flower
- Leaf
- Leaf
- Root
- Leaf
- Stem
- Stem
- Root

7. Write the object for living things and non living things in the box below

Living things		Nonliving things	
1.	<input type="text"/>	1.	<input type="text"/>
2.	<input type="text"/>	2.	<input type="text"/>
3.	<input type="text"/>	3.	<input type="text"/>
4.	<input type="text"/>	4.	<input type="text"/>



8. Draw five non living things

9. Draw five living things

10. Answer yes or no

1 Living Things need space

YES NO

2 Non-living things reproduce

YES NO

3 Living things breathe

YES NO

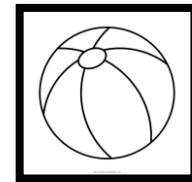



4 Living things need water

YES NO

5 Non-living things grow

YES NO

11. Write living thing or non living thing:





\_\_\_\_\_

\_\_\_\_\_

\_\_\_\_\_

12. Choose the correct option



12. Draw. What material can we be with wool?

13. Draw. What material can we with Wood?

14. Write the states of the wáter.

15. Sing the song.